


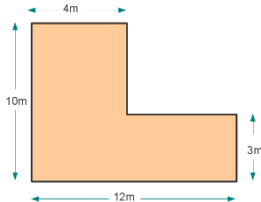


Name: _____

Date: _____

<p>1</p> <p>For the following pairs of numbers, which underlined digit is worth more? Circle the number.</p> <p>1, <u>6</u>32,794 or 78<u>3</u>,112</p>	<p>How I solved it.</p>	<p>5</p> <p>Convert from fraction to decimal and percentage.</p> <table border="1" data-bbox="1111 261 1778 467"> <thead> <tr> <th data-bbox="1111 261 1332 363">Fraction.</th> <th data-bbox="1332 261 1554 363">Decimal.</th> <th data-bbox="1554 261 1778 363">Percentage.</th> </tr> </thead> <tbody> <tr> <td data-bbox="1111 363 1332 467">$\frac{1}{2}$</td> <td data-bbox="1332 363 1554 467"></td> <td data-bbox="1554 363 1778 467"></td> </tr> </tbody> </table>	Fraction.	Decimal.	Percentage.	$\frac{1}{2}$			<p>How I solved it.</p>
Fraction.	Decimal.	Percentage.							
$\frac{1}{2}$									
<p>2</p> <p>Can you simplify these problems to make them easier to solve?</p> <p>e.g. $99 - 44 = 100 - 44 = 56 - 1 = 55$</p> <p>1, 81 - 39 =</p>	<p>How I solved it.</p>	<p>6</p> <p>Tom says to Lucy, "Last month I saved 0.25 of my pocket money and this month I saved $\frac{2}{5}$ of my pocket money, so all together I have saved 60% of my pocket money". Is what Tom says true or false? Explain your decision?</p> 	<p>How I solved it.</p>						
<p>3</p> <p>Can you simplify these problems to make them easier to solve?</p> <p>e.g. $53 - 82 + 47 = 53 + 47 - 82 = 100 - 82 = 18$</p> <p>1, $20 \times 7 \times 5 =$</p>	<p>How I solved it.</p>	<p>7</p> <p>Liam hires a bike, he has to return it by 3pm, the time is 2:25 pm. How many minutes has he got left?</p> 	<p>How I solved it.</p>						
<p>4</p>  <p>You have £20.00 to pay for three items, they cost £1.24, 7.92 and £2.55. How much change should you get back?</p>	<p>How I solved it.</p>	<p>8</p> <p>I want to buy carpet for my front room, can you calculate the area of the floor so that I know how much carpet to buy.</p> 	<p>How I solved it.</p>						