

- 1 Mo has 3 strawberries.  
Kim has 5 strawberries.

Mo 

Kim 

How many more strawberries does Kim have than Mo?



- 2 Ben has 4 cakes.  
Jo has 8 cakes.

Ben 

Jo 



How many fewer cakes does Ben have than Jo?

- 3 Tom has 5 pencils.  
Max has 8 pencils.

Tom   
Max 

What is the difference between the number of pencils?

- 4 Here is a bar model.

Sam   
Ron 

What does the bar model show?  
What can you work out?

